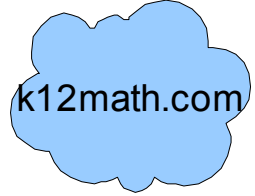


Simple Addition Printable

Facts to 10

A blue cloud-shaped logo containing the text "k12math.com".

Name _____

Date _____

Directions: Working with fact families. Do you see any patterns?

Answer each of the following addition problems. Then go back and **circle** all of the double facts.

1) $1 + 1 =$ _____

2) $0 + 1 =$ _____

3) $1 + 0 =$ _____

4) $2 + 1 =$ _____

5) $2 + 2 =$ _____

6) $2 + 0 =$ _____

7) $2 + 1 =$ _____

8) $3 + 1 =$ _____

9) $1 + 3 =$ _____

10) $3 + 2 =$ _____

11) $3 + 3 =$ _____

12) $3 + 0 =$ _____

13) $2 + 3 =$ _____

14) $0 + 3 =$ _____

15) $4 + 4 =$ _____

16) $3 + 4 =$ _____

17) $4 + 0 =$ _____

18) $4 + 1 =$ _____

19) $4 + 2 =$ _____

20) $5 + 5 =$ _____

21) $5 + 1 =$ _____

22) $5 + 3 =$ _____


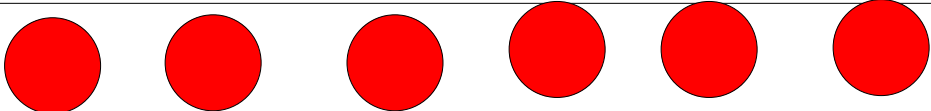
23) $5 + 4 =$ _____

24) $5 + 2 =$ _____

25) $5 + 0 =$ _____

BONUS

1) Mary had 3 red balls. Adam had 6 red balls

Mary	
Adam	

How many red balls did Mary and Adam **have all together**? _____

How many more red balls did Adam have than Mary? _____

